



Rewarding Learning

General Certificate of Secondary Education
2019

Centre Number

--	--	--	--	--

Candidate Number

--	--	--	--

Statistics

Unit 2
Foundation Tier



GST21

[GST21]

THURSDAY 20 JUNE, MORNING

TIME

1 hour 30 minutes.

INSTRUCTIONS TO CANDIDATES

Write your Centre Number and Candidate Number in the spaces provided at the top of this page.

Write your answers in the spaces provided in this question paper.

Answer **all eleven** questions.

Any working should be clearly shown in the spaces provided since marks may be awarded for partially correct solutions.

You **may** use a calculator for this paper.

INFORMATION FOR CANDIDATES

The total mark for this paper is 80.

Figures in brackets printed down the right-hand side of pages indicate the marks awarded to each question or part question.

You should have a calculator, ruler, compasses and protractor.

There is no formula sheet for this examination.

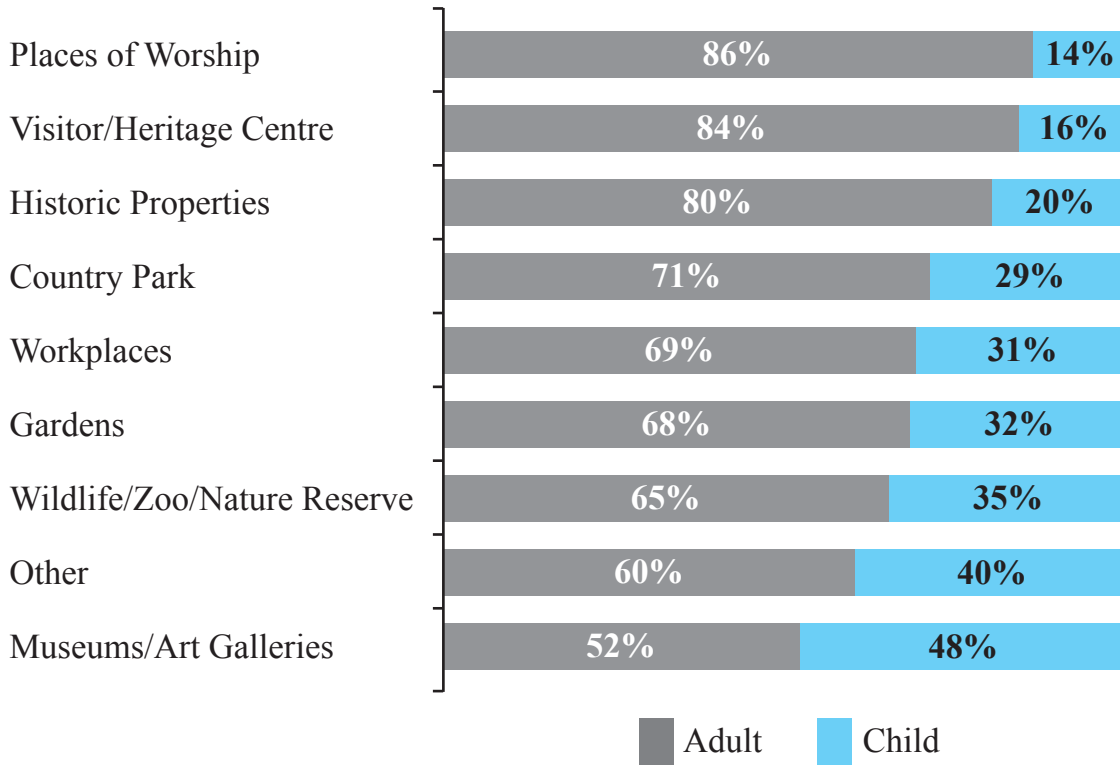
For Examiner's use only	
Question Number	Marks
1	
2	
3	
4	
5	
6	
7	
8	
9	
10	
11	
Total Marks	

Answer **all** questions

Examiner Only	
Marks	Remark

1 The compound bar chart below shows the Adult/Child ratios of visitors to a number of types of attraction in Northern Ireland during 2017

Adult/Child ratios of responding attractions



Total number of attractions supplying information (N=129).

(a) Write down the percentage of visitors to Historic Properties who were adults.

Answer _____ % [1]

- 3 Lucy asked the pupils in her class about which visitor attractions they had been to in Belfast.

Her results are given in the table below.

Visitor attraction	Tally	Number of visits
W5		8
SS Nomadic		7
Titanic Belfast		4
Ulster Museum		2
	TOTAL	21

Lucy collected her data by asking each of the pupils in her class, one at a time.

- (a) Has Lucy collected primary data or secondary data?

Primary data Secondary data [1]

- (b) Give one reason why Lucy used a Tally column in her table.

_____ [1]

- (c) Complete the pictogram below to display the data in the table.

KEY  represents 2 pupils

W5	
SS Nomadic	
Titanic Belfast	
Ulster Museum	

[2]

- (d) Write down the name of the modal visitor attraction.

Answer _____ [1]

Examiner Only

Marks Remark

(e) Why is it not possible to calculate the range for Lucy's data?

 [1]

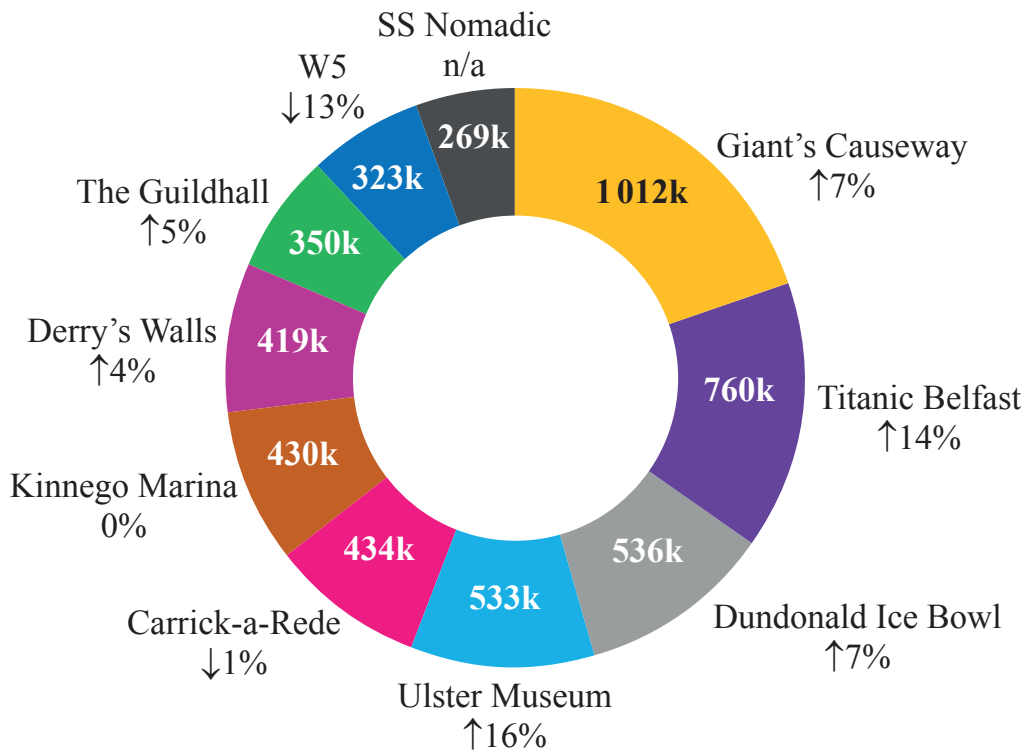
Lucy collected data from 17 pupils but she recorded 21 visits.

(f) Explain why these numbers are not the same.

 [1]

Examiner Only	
Marks	Remark

Lucy finds the following chart on the website of the Northern Ireland Statistics and Research Agency.



Arrows indicate increase or decrease between 2016 and 2017

Lucy notices that her data does not match the information in this chart.

(g) Give a reason how Lucy's data does not match the information in this chart.

[1]

Examiner Only	
Marks	Remark

- 4 The table below shows information about admission charges to tourist attractions in Northern Ireland between 2011 and 2017

Examiner Only	
Marks	Remark

Admission charges to responding attractions

	Adult						
Price of admission	2011	2012	2013	2014	2015	2016	2017
Maximum	£11.20	£17.50	£14.75	£15.50	£15.50	£20.00	£18.00
Minimum	£2.00	£1.00	£1.00	£1.60	£1.00	£2.00	£1.60
Mean	£4.60	£5.50	£4.75	£5.13	£5.74	£6.45	£5.93

	Child						
Price of admission	2011	2012	2013	2014	2015	2016	2017
Maximum	£5.70	£7.00	£7.25	£7.25	£8.50	£10.00	£8.00
Minimum	£1.50	£0.00	£0.00	£0.00	£1.00	£2.00	£0.50
Mean	£3.50	£2.80	£2.54	£2.88	£3.89	£4.14	£3.78

Total number of attractions supplying information ($N=51$).

- (a) Is the data quantitative or qualitative?

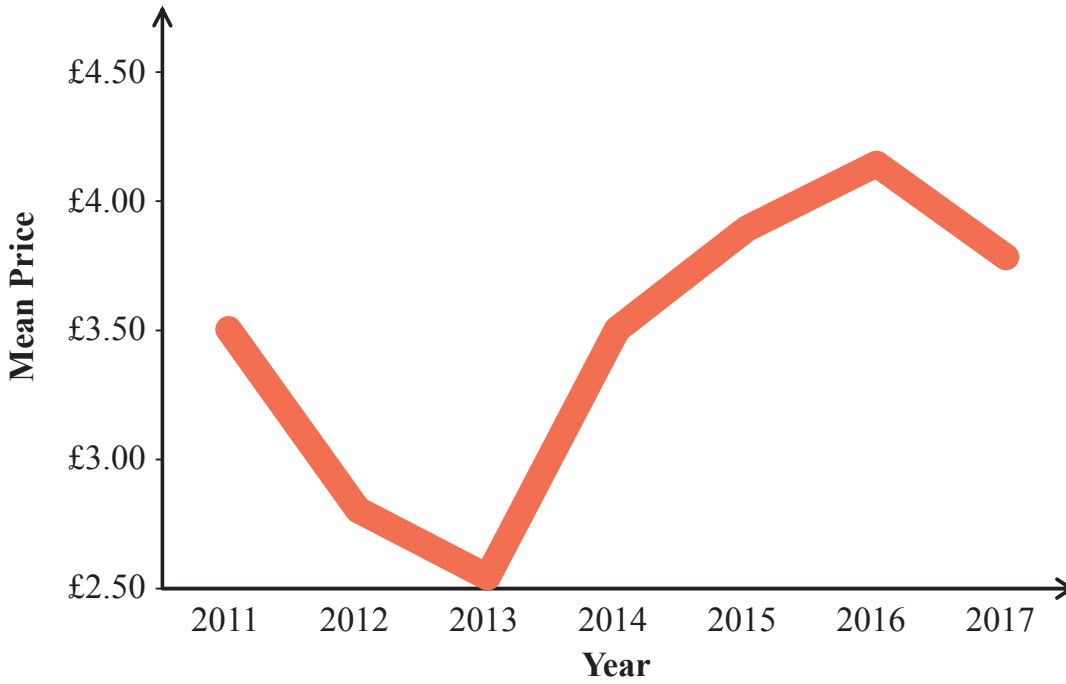
Quantitative

Qualitative

[1]

Beth has drawn a graph showing the change in the mean price of admission for a child between 2011 and 2017

Examiner Only	
Marks	Remark



(d) Give three reasons why Beth's graph is misleading.

1. _____

 _____ [1]

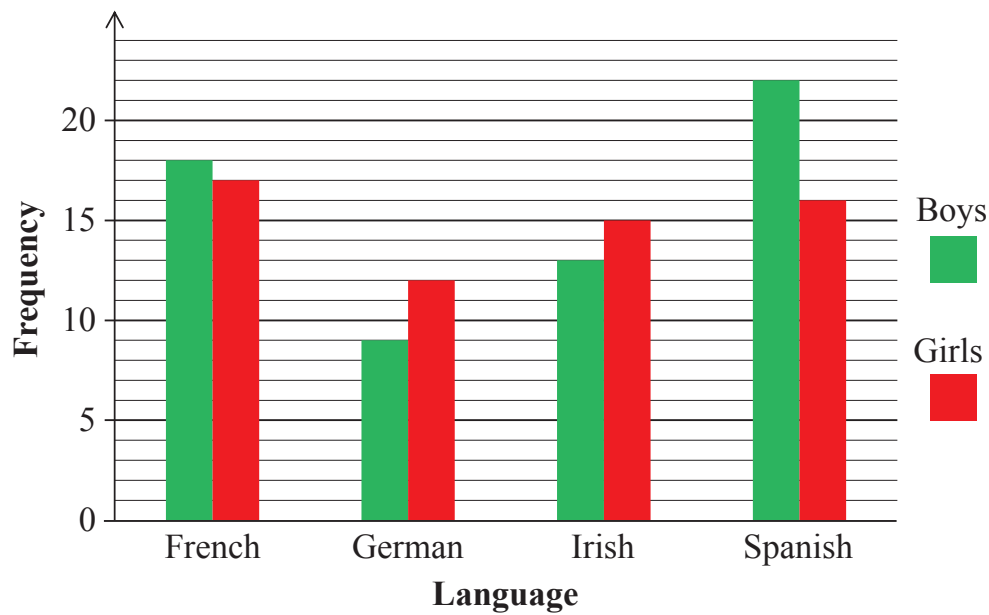
2. _____

 _____ [1]

3. _____

 _____ [1]

- 5 The multiple bar chart below shows the number of pupils in Year 12 in a school who study the following languages: French, German, Irish and Spanish. The school only allows pupils to study one language.



- (a) How many boys study German?

Answer _____ [1]

- (b) Which language is the mode?

Answer _____ [1]

A pupil who studies French is chosen at random.

- (c) What is the probability that this pupil is a girl?

Answer _____ [2]

A pupil who studies languages is chosen at random.

- (d) What is the probability that this pupil does not study Spanish?

Answer _____ [2]

Examiner Only	
Marks	Remark

6 Twenty-four visitors to a museum were asked how they had travelled there.

The results are listed below.


Bus Bus Walk Bus Car Train
 Bus Car Bus Car Train Walk
 Train Bus Walk Walk Car Bus
 Car Walk Bus Train Bus Walk

(a) Complete the Tally and Frequency columns in the table below.

Method of travel	Tally	Frequency	
Bus			
Car			
Train			
Walk			

[2]

(b) Draw a pie chart to illustrate this information.



[4]

Examiner Only	
Marks	Remark

One afternoon there were 120 visitors to the museum.

(c) Estimate how many of the visitors travelled there by train.

Answer _____ [2]

Examiner Only	
Marks	Remark

BLANK PAGE

(Questions continue overleaf)

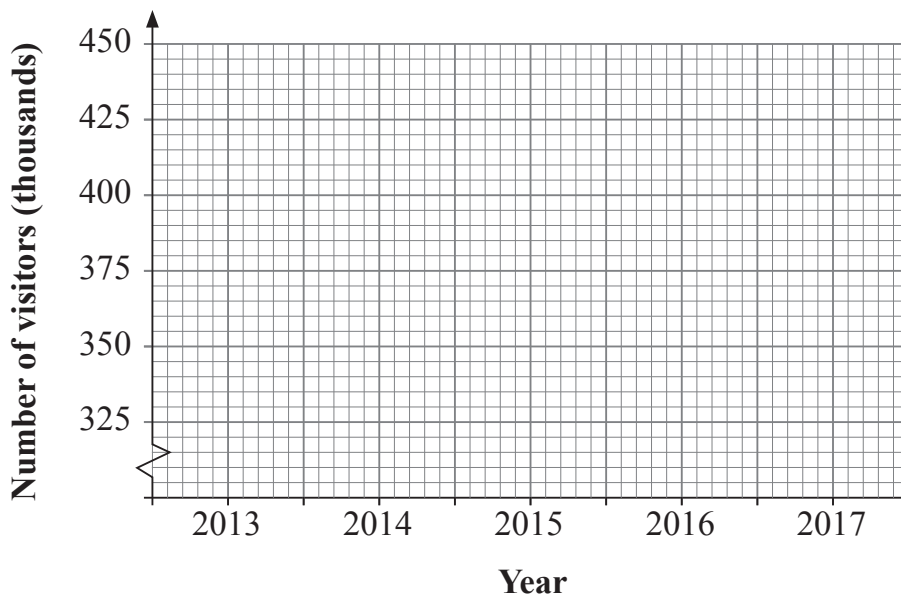
10 The table below shows the number of visitors, in thousands, to some visitor attractions in Northern Ireland between 2013 and 2017

Examiner Only	
Marks	Remark

**Top ten participating visitor attractions
(excluding Country Parks/Parks/Forests/Gardens)**

		Number of visitors (thousands)				
		2013	2014	2015	2016	2017
1	Giant’s Causeway World Heritage Site	754	788	851	944	1012
2	Titanic Belfast	604	634	622	667	760
3	Dundonald International Ice Bowl	n/a	n/a	n/a	500	536
4	Ulster Museum	416	466	465	460	533
5	Carrick-a-Rede Rope Bridge	263	324	354	440	434
6	Kinnego Marina	326	209	428	430	430
7	Derry’s Walls	411	370	381	403	419
8	The Guildhall	269	299	313	334	350
9	W5	270	324	372	370	323
10	SS Nomadic	n/a	n/a	n/a	n/a	269

(a) Draw a line graph to show the number of visitors to Derry’s Walls between 2013 and 2017



[3]

Keith wants to analyse the data using diagrams and calculations.

- (b) State one diagram and one calculation he could use and explain the reason for choosing each.

Diagram

Explanation

Calculation

Explanation

[4]

Examiner Only	
Marks	Remark

THIS IS THE END OF THE QUESTION PAPER

Sources

Q3(g) . . .Source: Data from © Crown Copyright / NISRA www.nisra.gov.uk



Rewarding Learning

General Certificate of Education

2019

Statistics

Pre-Release Materials for

Unit 2

Foundation and Higher

[GST21/GST22]

PRE-RELEASE MATERIALS

The Visitor Attraction Survey

The Northern Ireland Statistics and Research Agency (NISRA) use the statistical enquiry cycle to produce statistics on Tourism.

The Visitor Attraction Survey is carried out annually by NISRA. The primary purpose of the survey is to give an indication of how the tourism industry is performing in Northern Ireland.

The survey is issued by postal and electronic questionnaire and includes guidelines on how to complete it. The 2017 survey was issued to 400 attractions and 242 responded with data to analyse.

The Visitor Attraction Survey is a census of all Visitor Attractions in Northern Ireland. An attraction is one which is listed on the Discover Northern Ireland website. This means that the survey may be incomplete because if the details of an attraction are not listed on the website, it may not be included in the survey.

The Northern Ireland Visitor Attraction Survey 2017 report presents findings about several aspects of tourism, such as: types of attraction, visitor numbers, residency of visitors and admission charges.

The method used to record visitor numbers varies by attraction.

Method of recording visitor numbers (2017)

Method used	%
Ticket or group bookings	32%
Manual count	22%
Mechanical or electronic	23%
Estimate	19%
Sample count	4%
Other	1%
Total (221 responding attractions)	100%

Totals may not add to 100% due to rounding.

Data Quality Report

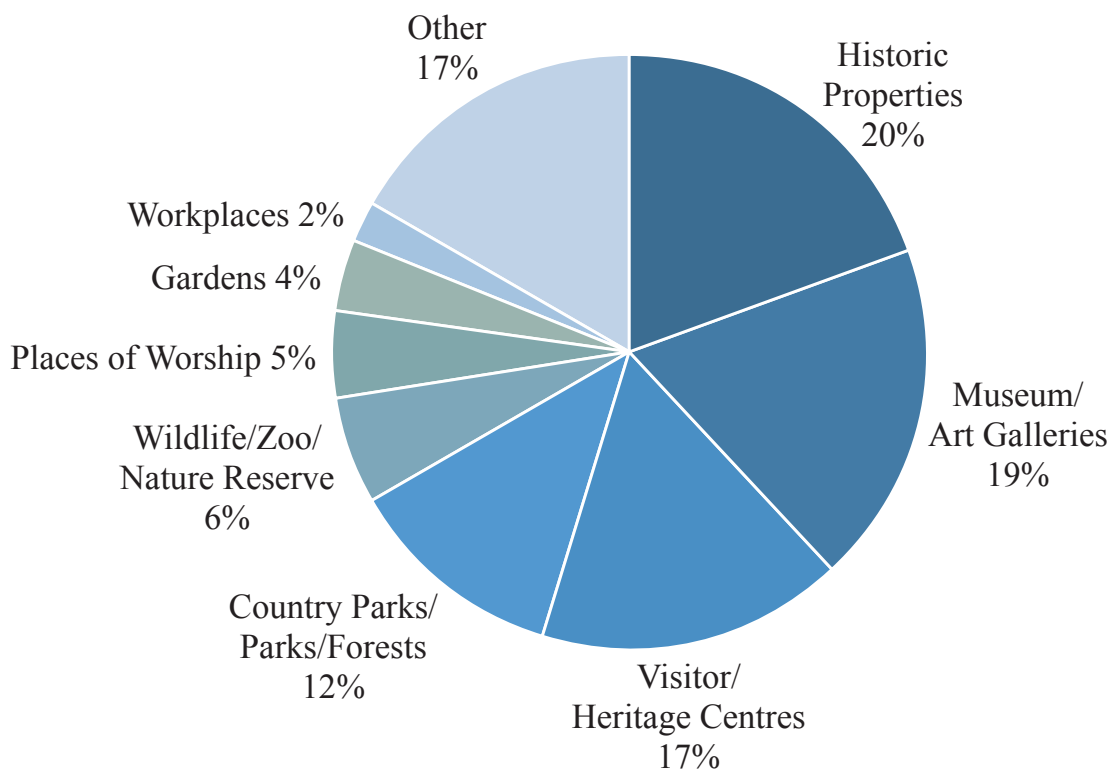
Relevance	Primary Purposes	The primary purpose of the Visitor Attraction Survey is to give an indication on how the tourism industry is performing in Northern Ireland by the number of visits to local attractions.
	Strengths	The Visitor Attraction Survey gives an indication of how tourism is performing locally. The surveys are completed by the attractions themselves so can give indications on external factors influencing tourism.
	Limitations	As the Visitor Attraction Survey is completed by each attraction, the reliability of the figures can vary. Some attractions do use ticket sales, but others provide estimates or use “electronic counters” which may also count commuters or day-to-day use.
	Annual	The results of the survey are published annually and contain estimates relating to the latest year. They are published approximately five to six months after the end of the year.
Content and Development	Questionnaire	The Visitor Attraction Survey is issued by questionnaire both postal and electronically by email. Guidelines for completion and contact details are issued alongside the questionnaire for anyone who has queries or requires assistance to fill out the form.
	Data Validation Methods	NISRA carry out sense checks on the data by comparing yearly data. Quite often changes arise due to different data collection methods or different people filling in the surveys.
Accuracy	Errors	There are likely to be lots of errors in the Visitor Attraction Survey results as each attraction has a different method of counting visitors. Some variations in results may be due to data collection methods. There are some attractions that report visitors by ticket sales. However, there are others who estimate their figures. Other attractions may have “electronic counters” which count the number of people who pass them. There are pros and cons with these counters as they provide an estimate. However, they may over count (if someone passes more than once or if they include people passing the counter who are not visitors) or undercount (if a large group pass the counter at one time they might not all be included).

Number of attractions by Attraction Category

Attraction Category	Number of Attractions	(%)
Country Parks/Parks/Forests	30	12%
Gardens	9	4%
Historic Properties	48	20%
Museum/Art Galleries	45	19%
Visitor/Heritage Centres	40	17%
Wildlife/Zoo/Nature Reserve	14	6%
Workplaces	4	2%
Places of Worship	11	5%
Other	41	17%
Total	242	100%

Totals may not add to 100% due to rounding.

Responding attractions by category type

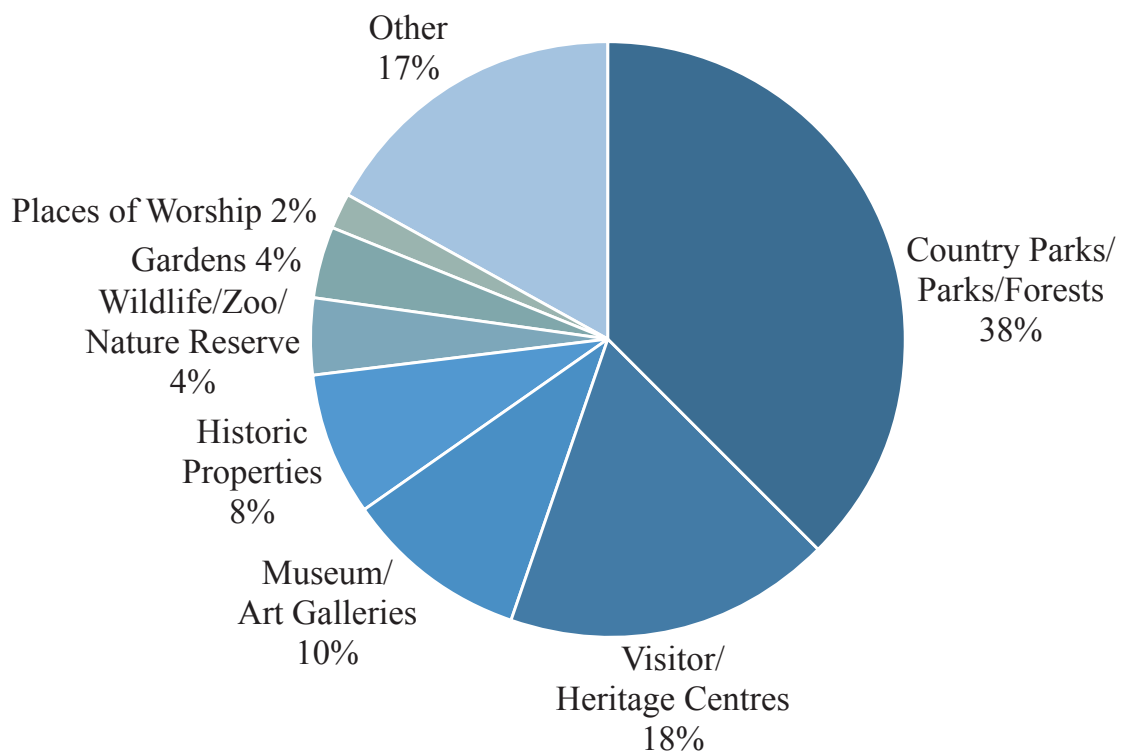


Number of visits by Attraction Category

Attraction Category	Number of Visitors	(%)
Country Parks/Parks/Forests	7 449 056	38%
Gardens	710 917	4%
Historic Properties	1 487 281	8%
Museum/Art Galleries	1 988 766	10%
Visitor/Heritage Centres	3 573 844	18%
Wildlife/Zoo/Nature Reserve	785 290	4%
Workplaces	17 737	<1%
Places of Worship	444 191	2%
Other	3 303 241	17%
Total (242 responding attractions)	19 760 323	100%

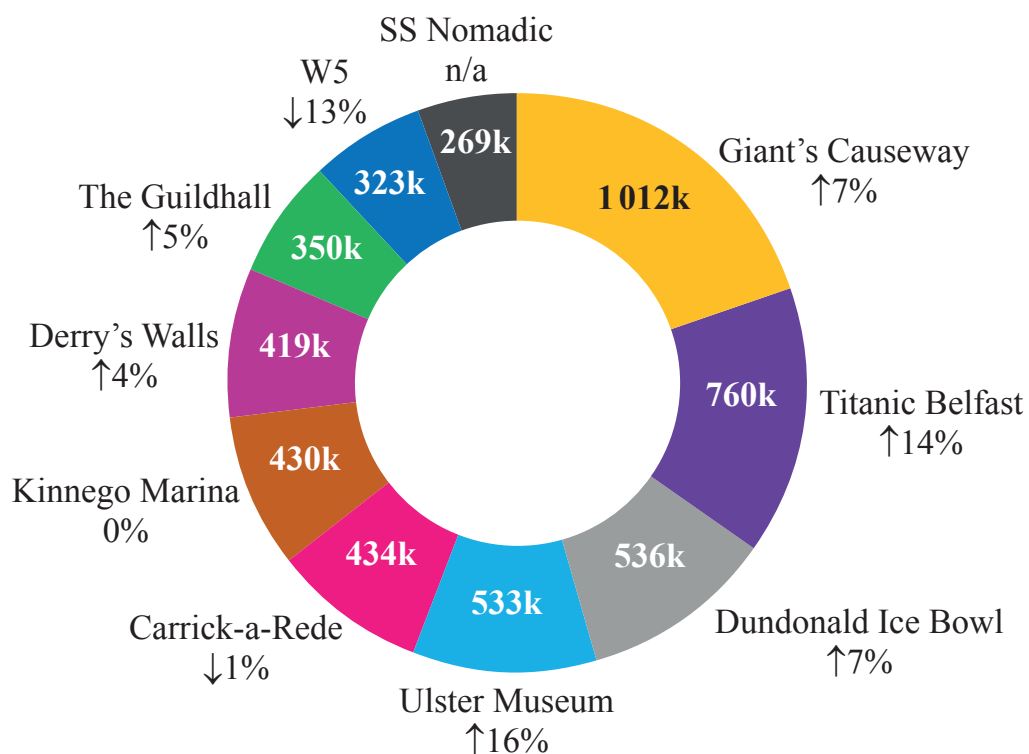
Totals may not add to 100% due to rounding.

Visits by category type



Top ten participating visitor attractions (excluding Country Parks/Parks/Forests/Gardens)

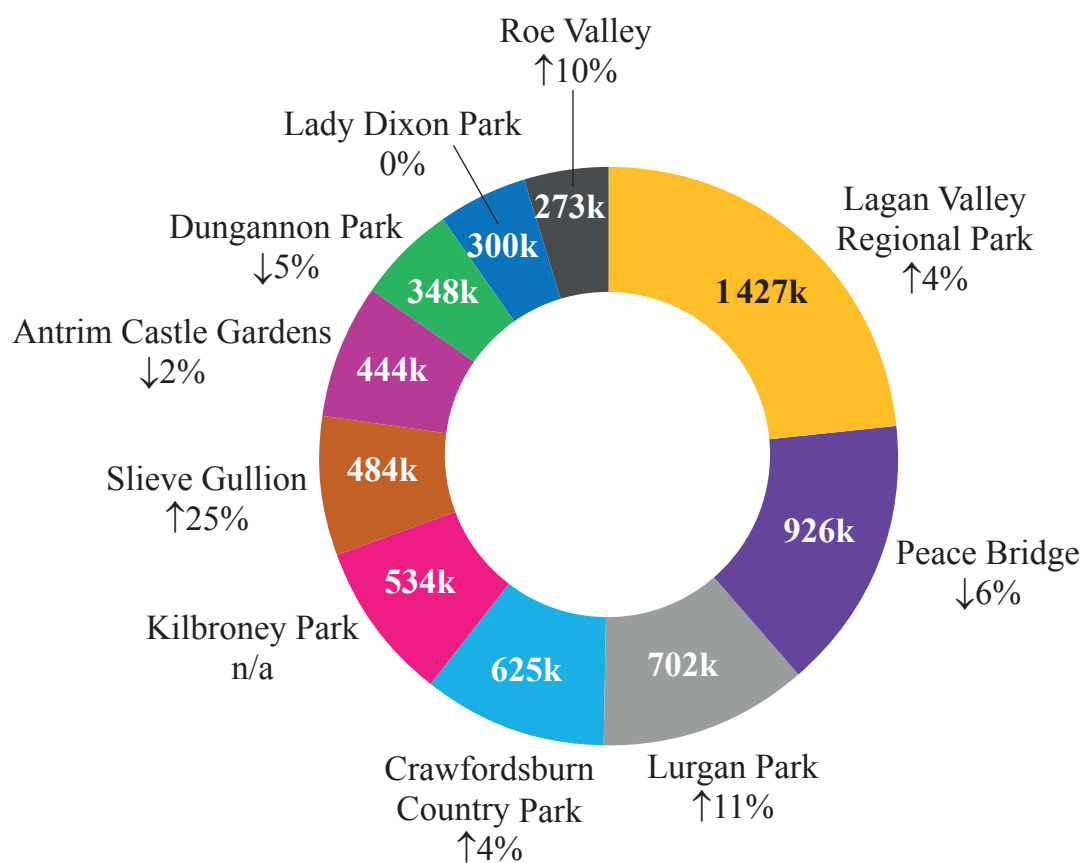
		Number of visitors (thousands)				
		2013	2014	2015	2016	2017
1	Giant's Causeway World Heritage Site	754	788	851	944	1 012
2	Titanic Belfast	604	634	622	667	760
3	Dundonald International Ice Bowl	n/a	n/a	n/a	500	536
4	Ulster Museum	416	466	465	460	533
5	Carrick-a-Rede Rope Bridge	263	324	354	440	434
6	Kinnego Marina	326	209	428	430	430
7	Derry's Walls	411	370	381	403	419
8	The Guildhall	269	299	313	334	350
9	W5	270	324	372	370	323
10	SS Nomadic	n/a	n/a	n/a	n/a	269



Arrows indicate increase or decrease between 2016 and 2017.

Top ten participating visitor attractions (Country Parks/Parks/Forests/Gardens)

		Number of visitors (thousands)				
		2013	2014	2015	2016	2017
1	Lagan Valley Regional Park (inc. Lagan Towpath)	1 397	1 257	1 296	1 375	1 427
2	Peace Bridge	1 243	1 071	981	981	926
3	Lurgan Park	770	784	n/a	634	702
4	Crawfordsburn Country Park	800	748	585	603	625
5	Kilbroney Park	115	95	122	124	534
6	Slieve Gullion Forest Park & The Giant's Lair	n/a	311	361	388	484
7	Antrim Castle Gardens	168	221	343	451	444
8	Dungannon Park	224	332	291	368	348
9	Sir Thomas & Lady Dixon Park	300	300	270	300	300
10	Roe Valley Country Park	250	250	250	248	273



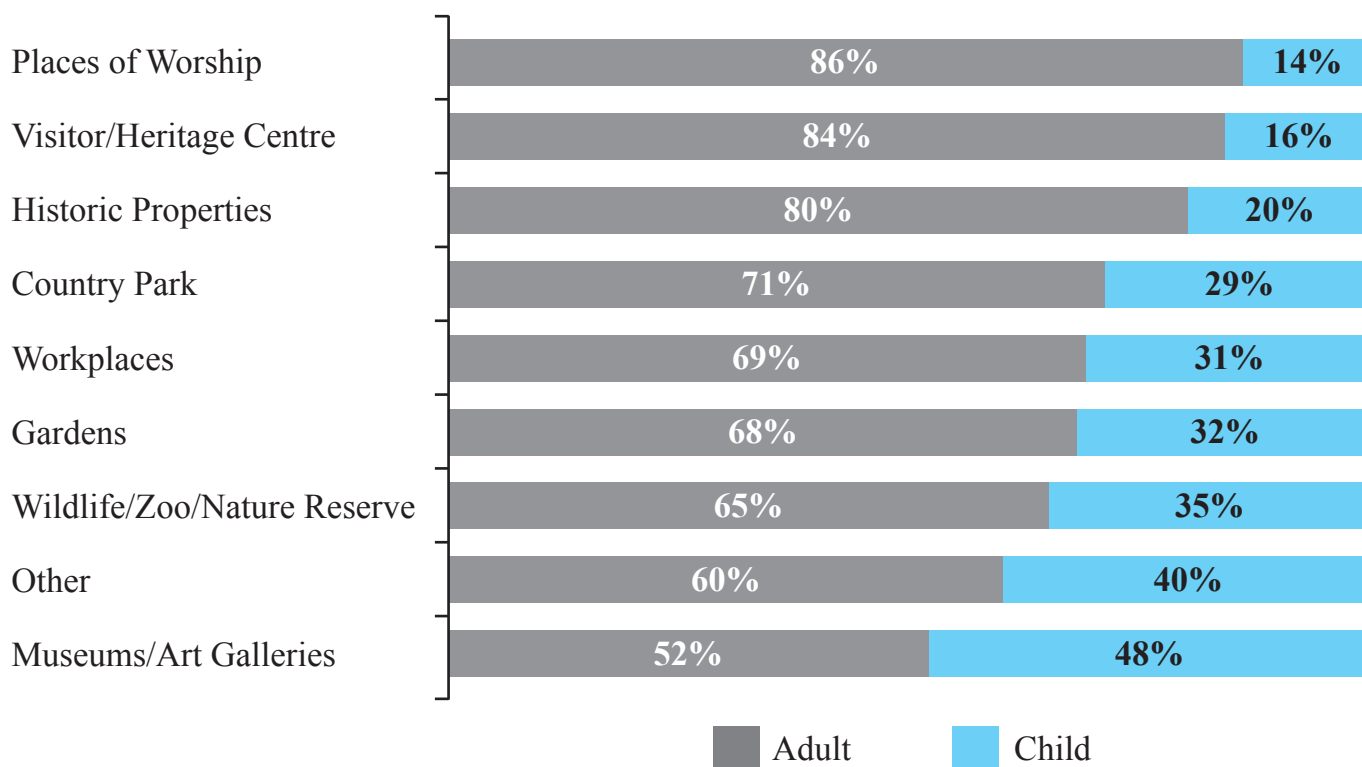
Admission charges to responding attractions

Price of admission	Adult						
	2011	2012	2013	2014	2015	2016	2017
Maximum	£11.20	£17.50	£14.75	£15.50	£15.50	£20.00	£18.00
Minimum	£2.00	£1.00	£1.00	£1.60	£1.00	£2.00	£1.60
Mean	£4.60	£5.50	£4.75	£5.13	£5.74	£6.45	£5.93

Price of admission	Child						
	2011	2012	2013	2014	2015	2016	2017
Maximum	£5.70	£7.00	£7.25	£7.25	£8.50	£10.00	£8.00
Minimum	£1.50	£0.00	£0.00	£0.00	£1.00	£2.00	£0.50
Mean	£3.50	£2.80	£2.54	£2.88	£3.89	£4.14	£3.78

Total number of attractions supplying information (N=51).

Adult/Child ratios of responding attractions



Total number of attractions supplying information (N=129).

Permission to reproduce all copyright material has been applied for. In some cases, efforts to contact copyright holders may have been unsuccessful and CCEA will be happy to rectify any omissions of acknowledgement in future if notified.

Sources

Data from © Crown Copyright / NISRA www.nisra.gov.uk